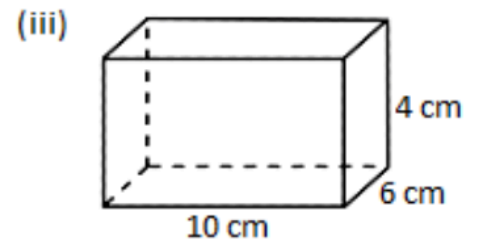
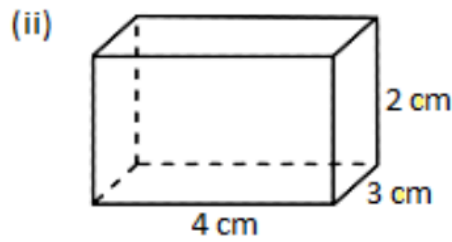
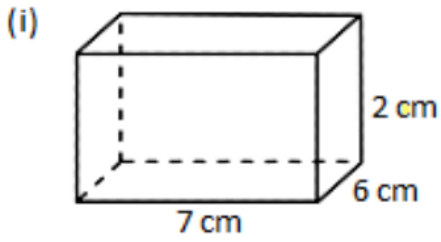
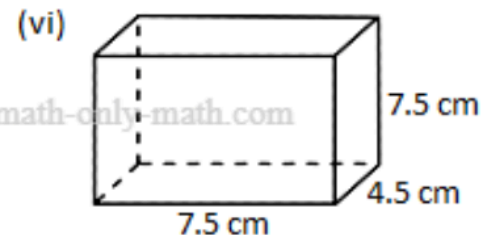
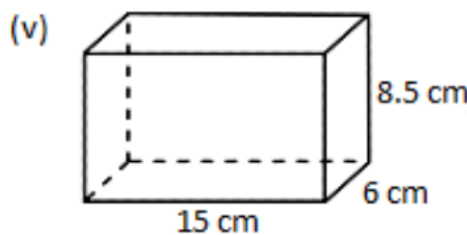
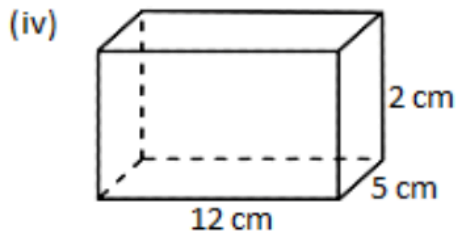


10. Find the volume of the following rectangular solids:



©math-only-math.com



Save 139

11. Complete the given table:

Volume of Cube and Cuboid

©math-only-math.com

S. No.	Shape	Length	Breadth	Height	Volume
(i)	Cuboid	8 cm	4 cm	5 cm	
(ii)	Cube	3 cm			27 cubic cm
(iii)	Cuboid	9 cm		10 cm	990 cubic m
(iv)	Cuboid	3 cm		4 cm	144 cm ³

Save 139